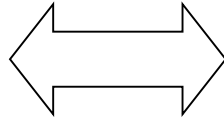


Like og ulike

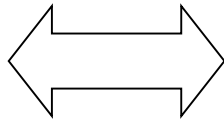
Sjå på boksane som har pil mellom seg. Kva er dei like i? Kva er dei ikkje like i?

$2+6$



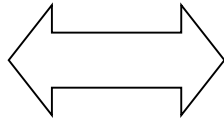
$4+4$

$5+3$



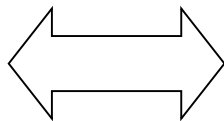
$13-5$

$7+8$



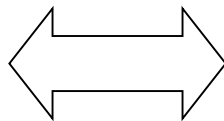
$7 \cdot 8$

$14+5$



$14 + 5$

318

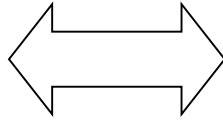


138

Like og ulike


Sjå på boksane som har pil mellom seg. Kva er dei like i? Kva er dei ikkje like i?

$$\frac{1}{2}$$




$$\frac{2}{4}$$

$$\frac{1}{3}$$



$$\frac{1}{3}$$

$$0,5$$



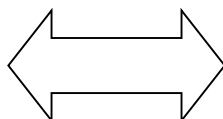
$$\frac{5}{10}$$

$$\frac{3}{3}$$



$$1$$

$$0,3$$



$$3,0$$