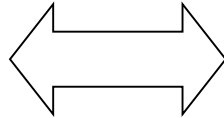


# Like og ulike

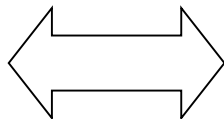
Se på boksene som har pil mellom seg. Hva er de like i? Hva er de ikke like i?

$2+6$




$4+4$

$5+3$



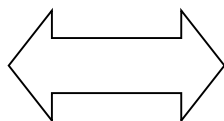
$13-5$

$7+8$



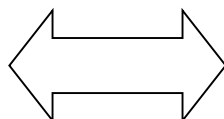
$7 \cdot 8$

$14+5$



$14 + 5$

$318$

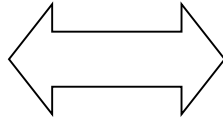


$138$

# Like og ulike


Se på boksene som har pil mellom seg. Hva er de like i? Hva er de ikke like i?

$$\frac{1}{2}$$




$$\frac{2}{4}$$

$$\frac{1}{3}$$



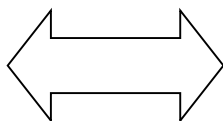
$$\frac{1}{3}$$

$$0,5$$



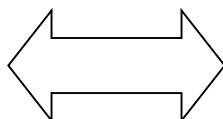
$$\frac{5}{10}$$

$$\frac{3}{3}$$



$$1$$

$$0,3$$



$$3,0$$

